


## Assessment Card

It's time to see what you have learned! Circle the correct answer:

What is the sum?

$$\frac{1}{3} + \frac{1}{6} =$$

A.  $\frac{3}{6}$   
B.  $\frac{2}{6}$   
C.  $\frac{2}{9}$




1

What is the difference?

$$\frac{2}{5} - \frac{3}{10} =$$

A.  $\frac{1}{5}$   
B.  $\frac{1}{10}$   
C.  $\frac{3}{5}$




2

What is the sum?

$$\frac{1}{6} + \frac{2}{3} =$$

A.  $\frac{3}{9}$   
B.  $\frac{3}{6}$   
C.  $\frac{5}{6}$




3

What is the difference?

$$\frac{1}{2} - \frac{3}{8} =$$

A.  $\frac{1}{7}$   
B.  $\frac{2}{6}$   
C.  $\frac{1}{8}$



4

Having Trouble? Look at your **Reference Card** and **Activity Card** for help! Call your teacher if you still can't solve the problems with confidence.